



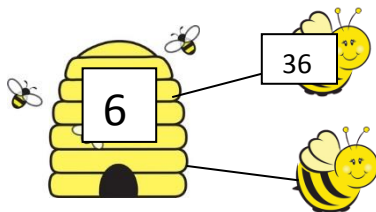
Name: \_\_\_\_\_

Date: \_\_\_\_\_

# Honeycomb Division

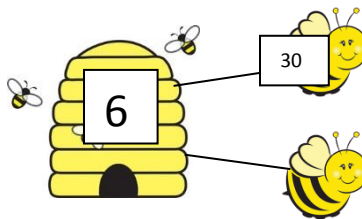
Circle the correct quotient of each division problem. Be sure to double check your answers!

A



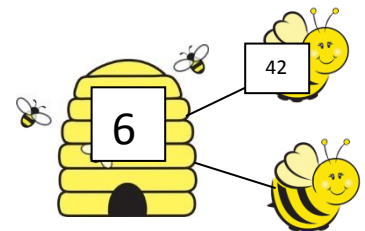
4   1   6

B



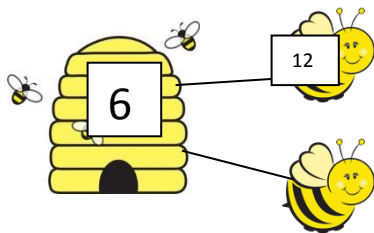
3   4   5

C



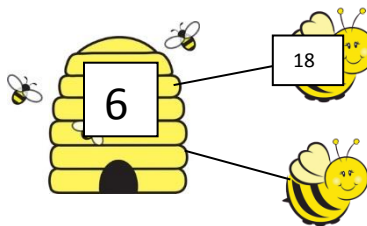
3   7   2

D



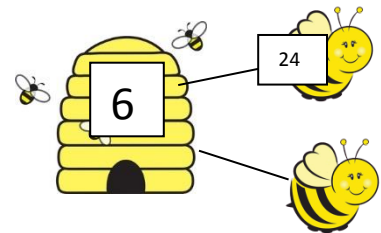
0   1   2

E



3   1   4

F



6   4   5



Name: \_\_\_\_\_  
Date: \_\_\_\_\_

## Answer Key

- A. 6
- B. 5
- C. 7
- D. 2
- E. 3
- F. 4